

RDW:

Read.

Draw and label.

Write a number sentence.


Write a word sentence.

Eureka Math

2nd Grade

Application Problems


Module 1



Name: _____

Module 1, Lesson 3

The teacher has 48 folders. She gives 6 folders to the first table. How many folders does she have now?




Module 1, Lesson 8

Emma has 45 pencils. Eight pencils are sharpened. How many pencils are not sharpened?



Module 1, Lesson 5

Mia counted all the fish in a tank. She counted 38 goldfish and 4 black fish. How many fish were in the tank?




Module 1, Lesson 6

Mary buys 30 stickers. She puts 7 in her friend's backpack. How many stickers does Mary have left?



Module 1, Lesson 7

Ricardo gave 5 tacos to his sister. He started with 13. How many tacos does Ricardo have left?



Module 1, Lesson 4

Mark had a stick of 9 green linking cubes. His friend gave him 4 yellow linking cubes. How many linking cubes does Mark have now?



Thank You
For Your Purchase!

These are meant for 2-sided copies and folded together.
Copy Pages 1 and 2 together and Pages 3 and 4 together.

Please contact me with any questions. I love feedback that helps me to
make my products more functional in the classroom.

Contact me at: artappsandattitude@gmail.com

Graphics By:

